

# 2

## THINKING LIKE AN ECONOMIST

---

### **WHAT'S NEW IN THE EIGHTH EDITION:**

There is a new *Ask the Experts* feature on "Ticket Resale."

### **LEARNING OBJECTIVES:**

**By the end of this chapter, students should understand:**

- how economists apply the methods of science.
- how assumptions and models can shed light on the world.
- two simple models—the circular flow and the production possibilities frontier.
- the difference between microeconomics and macroeconomics.
- the difference between positive and normative statements.
- the role of economists in making policy.
- why economists sometimes disagree with one another.

### **CONTEXT AND PURPOSE:**

Chapter 2 is the second chapter in a three-chapter section that serves as the introduction of the text. Chapter 1 introduced ten principles of economics that will be revisited throughout the text. Chapter 2 develops how economists approach problems while Chapter 3 will explain how individuals and countries gain from trade.

The purpose of Chapter 2 is to familiarize students with how economists approach economic problems. With practice, they will learn how to approach similar problems in this dispassionate systematic way. They will see how economists employ the scientific method, the role of assumptions in model building, and the application of two specific economic models. Students will also learn the important distinction between two roles economists can play: as scientists when we try to explain the economic world and as policymakers when we try to improve it.

**KEY POINTS:**

- Economists try to address their subject with a scientist's objectivity. Like all scientists, they make appropriate assumptions and build simplified models to understand the world around them. Two simple economic models are the circular-flow diagram and the production possibilities frontier.
- The field of economics is divided into two subfields: microeconomics and macroeconomics. Microeconomists study decision making by households and firms and the interactions among households and firms in the marketplace. Macroeconomists study the forces and trends that affect the economy as a whole.
- A positive statement is an assertion about how the world *is*. A normative statement is an assertion about how the world *ought to be*. When economists make normative statements, they are acting more as policy advisers than as scientists.
- Economists who advise policymakers sometimes offer conflicting advice either because of differences in scientific judgments or because of differences in values. At other times, economists are united in the advice they offer, but policymakers may choose to ignore the advice because of the many forces and constraints imposed by the political process.

**CHAPTER OUTLINE:**

## I. The Economist as Scientist

## A. Economists Follow the Scientific Method.

1. Observations help us to develop theory.
2. Data can be collected and analyzed to evaluate theories.
3. Using data to evaluate theories is more difficult in economics than in physical science because economists are unable to generate their own data and must make do with whatever data are available.
4. Thus, economists pay close attention to the natural experiments offered by history.

## B. Assumptions Make the World Easier to Understand.

1. Example: to understand international trade, it may be helpful to start out assuming that there are only two countries in the world producing only two goods. Once we understand how trade would work between these two countries, we can extend our analysis to a greater number of countries and goods.
2. One important role of a scientist is to understand which assumptions one should make.
3. Economists often use assumptions that are somewhat unrealistic but will have small effects on the actual outcome of the answer.

## C. Economists Use Economic Models to Explain the World around Us.

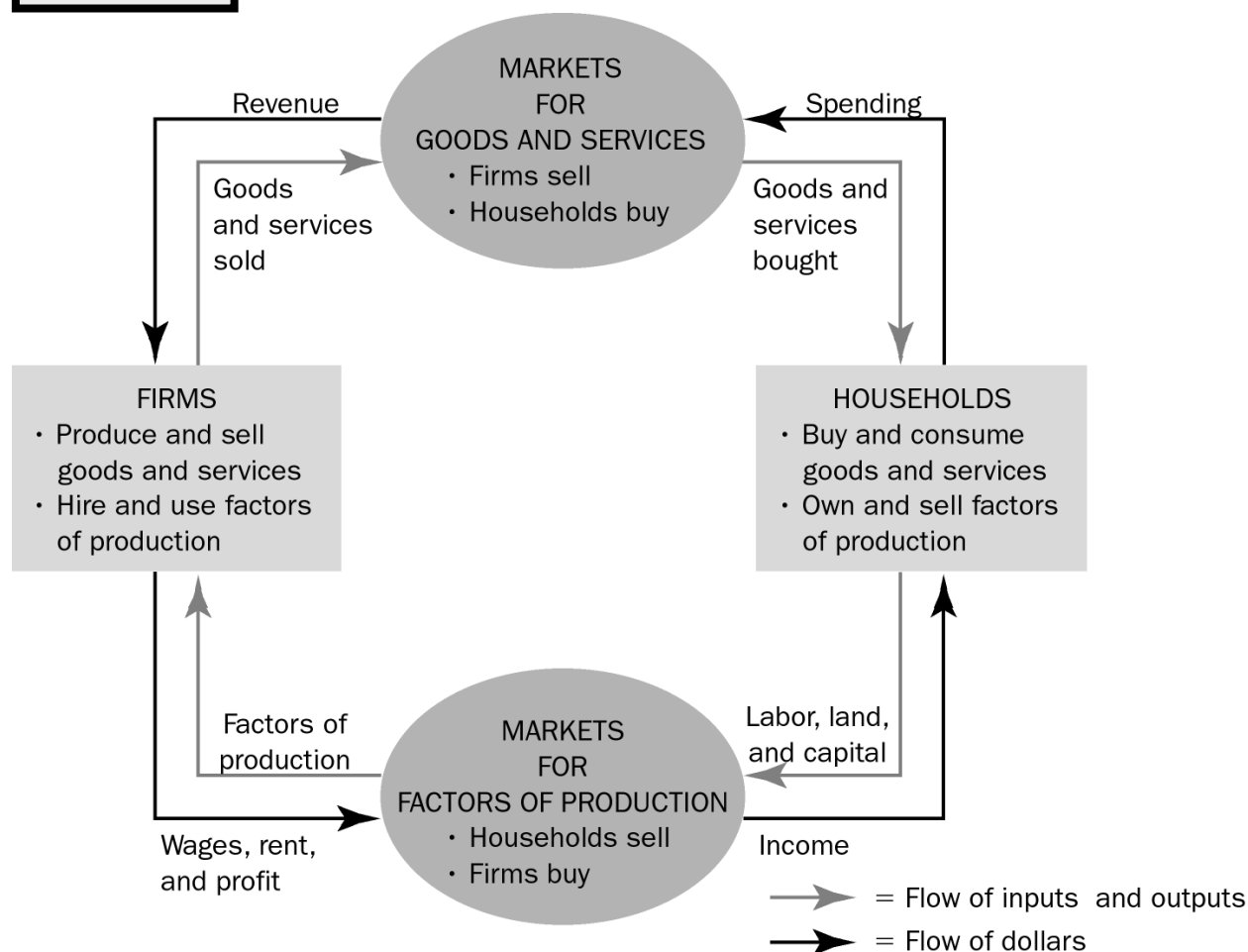


To illustrate to the class how simple but unrealistic models can be useful, bring a road map to class. Point out how unrealistic it is. For example, it does not show where all of the stop signs, gas stations, or restaurants are located. It assumes that the earth is flat and two-dimensional. But, despite these simplifications, a map usually helps travelers get from one place to another. Thus, it is a good model.

1. Most economic models are composed of diagrams and equations.
2. The goal of a model is to simplify reality to increase our understanding. Assumptions help to simplify reality.

#### D. Our First Model: The Circular Flow Diagram

**Figure 1**



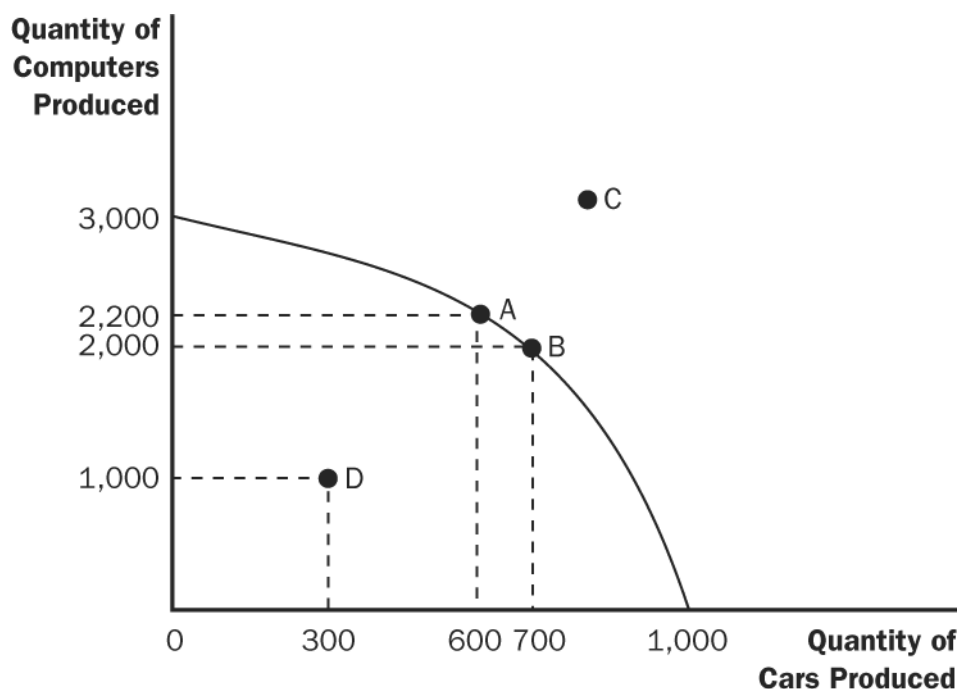
1. Definition of **circular-flow diagram**: a visual model of the economy that shows how dollars flow through markets among households and firms.
2. This diagram is a very simple model of the economy. Note that it ignores the roles of government and international trade.

- a. There are two decision makers in the model: households and firms.
  - b. There are two markets: the market for goods and services and the market for factors of production.
  - c. Firms are sellers in the market for goods and services and buyers in the market for factors of production.
  - d. Households are buyers in the market for goods and services and sellers in the market for factors of production.
  - e. The inner loop represents the flows of inputs and outputs between households and firms.
  - f. The outer loop represents the flows of dollars between households and firms.
- E. Our Second Model: The Production Possibilities Frontier
- 1. Definition of **production possibilities frontier: a graph that shows the combinations of output that the economy can possibly produce given the available factors of production and the available production technology.**



Spend more time with this model than you think is necessary. Be aware that students need to feel confident with this first graphical and mathematical model. Be deliberate with every point. If you lose them with this model, they may be gone for the rest of the course.

- 2. Example: an economy that produces two goods, cars and computers.
  - a. If all resources are devoted to producing cars, the economy would produce 1,000 cars and zero computers.
  - b. If all resources are devoted to producing computers, the economy would produce 3,000 computers and zero cars.
  - c. More likely, the resources will be divided between the two industries, producing some cars and some computers. The feasible combinations of output are shown on the production possibilities frontier.

**Figure 2**

You may want to include time dimensions for variables. This will help students to realize that a new production possibilities frontier occurs for each period. The axes show the levels of output per period.

#### ALTERNATIVE CLASSROOM EXAMPLE:

A small country produces two goods: mp3 players and music downloads. Points on a production possibilities frontier can be shown in a table or a graph:

|                 | A      | B      | C      | D      | E   |
|-----------------|--------|--------|--------|--------|-----|
| mp3 Players     | 0      | 100    | 200    | 300    | 400 |
| Music Downloads | 70,000 | 60,000 | 45,000 | 25,000 | 0   |

The production possibilities frontier should be drawn from the numbers above.

Students should be asked to calculate the opportunity cost of increasing the number of mp3 players produced by 100:

- between 0 and 100
- between 100 and 200
- between 200 and 300
- between 300 and 400

3. Because resources are scarce, not every combination of computers and cars is possible. Production at a point outside of the curve (such as C) is not possible given the economy's current level of resources and technology.



It is useful to point out that the production possibilities frontier depends on two things: the availability of resources and the level of technology.

4. Production is efficient at points on the curve (such as A and B). This implies that the economy is getting all it can from the scarce resources it has available. There is no way to produce more of one good without producing less of another.
5. Production at a point inside the curve (such as D) is inefficient.
  - a. This means that the economy is producing less than it can from the resources it has available.
  - b. If the source of the inefficiency is eliminated, the economy can increase its production of both goods.
6. The production possibilities frontier reveals Principle #1: People face trade-offs.
  - a. Suppose the economy is currently producing 600 cars and 2,200 computers.
  - b. To increase the production of cars to 700, the production of computers must fall to 2,000.
7. Principle #2 is also shown on the production possibilities frontier: The cost of something is what you give up to get it (opportunity cost).
  - a. The opportunity cost of increasing the production of cars from 600 to 700 is 200 computers.
  - b. Thus, the opportunity cost of each car is two computers.
8. The opportunity cost of a car depends on the number of cars and computers currently produced by the economy.
  - a. The opportunity cost of a car is high when the economy is producing many cars and few computers.
  - b. The opportunity cost of a car is low when the economy is producing few cars and many computers.
9. Economists generally believe that production possibilities frontiers often have this bowed-out shape because some resources are better suited to the production of cars than computers (and vice versa).



Be aware that students often have trouble understanding why opportunity costs rise as the production of a good increases. You may want to use several specific examples of resources that are more suited to producing cars than computers (e.g., an experienced mechanic) as well as examples of resources that are more suited to producing computers than cars (e.g., an experienced computer programmer).

10. The production possibilities frontier can shift if resource availability or technology changes. Economic growth can be illustrated by an outward shift of the production possibilities frontier.

**Figure 3**



You may also want to teach students about budget constraints at this time (call them “consumption possibilities frontiers”). This reinforces the idea of opportunity cost, and allows them to see how opportunity cost can be measured by the slope. Also, it will introduce students to the use of straight-line production possibilities frontiers (which appear in Chapter 3). However, be careful if you choose to do this as students often find the difference between straight-line and concave production possibilities frontiers challenging.

**ALTERNATIVE CLASSROOM EXAMPLE:**

Ivan receives an allowance from his parents of \$20 each week. He spends his entire allowance on two goods: ice cream cones (which cost \$2 each) and tickets to the movies (which cost \$10 each).

Students should be asked to calculate the opportunity cost of one movie and the opportunity cost of one ice cream cone.

Ivan’s consumption possibilities frontier (budget constraint) can be drawn. It should be noted that the slope is equal to the opportunity cost and is constant because the opportunity cost is constant.

Ask students what would happen to the consumption possibilities frontier if Ivan’s allowance changes or if the price of ice cream cones or movies changes.

F. Microeconomics and Macroeconomics

1. Economics is studied on various levels.
  - a. Definition of **microeconomics: the study of how households and firms make decisions and how they interact in markets.**
  - b. Definition of **macroeconomics: the study of economy-wide phenomena, including inflation, unemployment, and economic growth.**
2. Microeconomics and macroeconomics are closely intertwined because changes in the overall economy arise from the decisions of individual households and firms.
3. Because microeconomics and macroeconomics address different questions, each field has its own set of models which are often taught in separate courses.

II. The Economist as Policy Adviser

A. Positive versus Normative Analysis

1. Example of a discussion of minimum-wage laws: Portia says, "Minimum-wage laws cause unemployment." Noah says, "The government should raise the minimum wage."
2. Definition of **positive statements**: **claims that attempt to describe the world as it is.**
3. Definition of **normative statements**: **claims that attempt to prescribe how the world should be.**
4. Positive statements can be evaluated by examining data, while normative statements involve personal viewpoints.
5. Positive views about how the world works affect normative views about which policies are desirable.



Use several examples to illustrate the differences between positive and normative statements and stimulate classroom discussion. Possible examples include the minimum wage, budget deficits, tobacco taxes, legalization of marijuana, and seat-belt laws.



Have students bring in newspaper articles and in groups, identify each statement in an editorial paragraph as being a positive or normative statement. Discuss the differences among news stories, editorials, and blogs and the analogy to economists as scientists and as policy advisers.

6. Much of economics is positive; it tries to explain how the economy works. But those who use economics often have goals that are normative. They want to understand how to improve the economy.

#### B. Economists in Washington

1. Economists are aware that trade-offs are involved in most policy decisions.
2. The president receives advice from the Council of Economic Advisers (created in 1946).
3. Economists are also employed by administrative departments within the various federal agencies such as the Office of Management and Budget, the Department of Treasury, the Department of Labor, the Congressional Budget Office, and the Federal Reserve.
4. The research and writings of economists can also indirectly affect public policy.

#### C. Why Economists' Advice Is Not Always Followed

1. The process by which economic policy is made differs from the idealized policy process assumed in textbooks.
2. Economists offer crucial input into the policy process, but their advice is only part of the advice received by policymakers.

### III. Why Economists Disagree

#### A. Differences in Scientific Judgments



1. Economists may disagree about the validity of alternative positive theories or about the size of the effects of changes in the economy on the behavior of households and firms.
2. Example: some economists feel that a change in the tax code that would eliminate a tax on income and create a tax on consumption would increase saving in this country. However, other economists feel that the change in the tax system would have little effect on saving behavior and therefore do not support the change.

#### B. Differences in Values

#### C. Perception versus Reality

1. While it seems as if economists do not agree on much, this is in fact not true. Table 1 contains 20 propositions that are endorsed by a majority of economists.

**Table 1**

2. Almost all economists believe that rent control adversely affects the availability and quality of housing.
3. Most economists also oppose barriers to trade.

#### D. Ask the Experts: Ticket Resale

1. The first “Ask the Experts” box shows that 80% of economic experts agree that laws that limit resale of tickets make potential audience members worse off.



Use the “Ask the Expert” questions and responses from economists throughout the text to spark discussions. In this case, ask students their opinion on ticket scalping laws. Discuss the opportunity for potential audience members to pay a price higher than the stated ticket price to be able to attend the event rather than be excluded from the event because there are no more tickets available at the stated ticket price.

### IV. In the News: Why You Should Study Economics

1. Training in economics helps us to understand fallacies and to anticipate unintended consequences.
2. This excerpt from a commencement address by Robert D. McTeer, Jr., the former President of the Federal Reserve Bank of Dallas describes why students should study economics.

### V. Appendix—Graphing: A Brief Review



Many instructors may be unaware of how much trouble beginning students have grasping the most basic graphs. It is important for instructors to make sure that students are comfortable with these techniques.

#### A. Graphs of a Single Variable

**Figure A-1**

1. Pie Chart
2. Bar Graph
3. Time-Series Graph

**B. Graphs of Two Variables: The Coordinate System****Figure A-2**

1. Economists are often concerned with relationships between two or more variables.
2. Ordered pairs of numbers can be graphed on a two-dimensional grid.
  - a. The first number in the ordered pair is the  $x$ -coordinate and tells us the horizontal location of the point.
  - b. The second number in the ordered pair is the  $y$ -coordinate and tells us the vertical location of the point.
3. The point with both an  $x$ -coordinate and  $y$ -coordinate of zero is called the origin.
4. Two variables that increase or decrease together have a positive correlation.
5. Two variables that move in opposite directions (one increases when the other decreases) have a negative correlation.

**C. Curves in the Coordinate System**

1. Often, economists want to show how one variable affects another, holding all other variables constant.

**Table A-1****Figure A-3**

- a. An example of this is a demand curve.
- b. The demand curve shows how the quantity of a good a consumer wants to purchase varies as its price varies, holding everything else (such as income) constant.
- c. If income does change, this will alter the amount of a good that the consumer wants to purchase at any given price. Thus, the relationship between price and quantity desired has changed and must be represented as a new demand curve.

**Figure A-4**

- d. A simple way to tell if it is necessary to shift the curve is to look at the axes. When a variable that is not named on either axis changes, the curve shifts.

## D. Slope

**Figure A-5**

1. We may want to ask how strongly a consumer reacts if the price of a product changes.
  - a. If the demand curve is very steep, the quantity desired does not change much in response to a change in price.
  - b. If the demand curve is very flat, the quantity desired changes a great deal when the price changes.
2. The slope of a line is the ratio of the vertical distance covered to the horizontal distance covered as we move along the line ("rise over run").

$$\text{slope} = \frac{\Delta y}{\Delta x}$$

3. A small slope (in absolute value) means that the demand curve is relatively flat; a large slope (in absolute value) means that the demand curve is relatively steep.

## E. Cause and Effect

1. Economists often make statements suggesting that a change in Variable A causes a change in Variable B.
2. Ideally, we would like to see how changes in Variable A affect Variable B, holding all other variables constant.
3. This is not always possible and could lead to a problem caused by omitted variables.

**Figure A-6**

- a. If Variables A and B both change at the same time, we may conclude that the change in Variable A caused the change in Variable B.
- b. But, if Variable C has also changed, it is entirely possible that Variable C is responsible for the change in Variable B.
4. Another problem is reverse causality.

**Figure A-7**

- a. If Variable A and Variable B both change at the same time, we may believe that the change in Variable A led to the change in Variable B.
- b. However, it is entirely possible that the change in Variable B led to the change in Variable A.
- c. It is not always as simple as determining which variable changed first because individuals often change their behavior in response to a change in their expectations about the future. This means that Variable A may change before Variable B but only because of the expected change in Variable B.



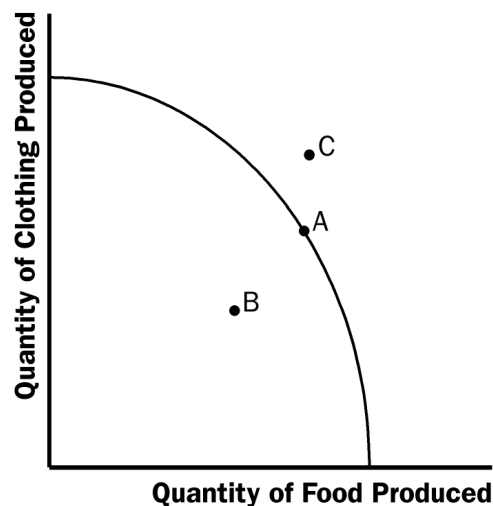
There are two very good examples in the text that you should use in class. To discuss the omitted variable problem, point out to students that a rise in the sales of cigarette lighters is positively related to the number of individuals diagnosed with lung cancer. To discuss reverse causality, show that an increase in minivan sales is followed by an increase in birth rates.

## **SOLUTIONS TO TEXT PROBLEMS:**

### **Quick Quizzes**

1. Economics is like a science because economists devise theories, collect data, and analyze the data in an attempt to verify or refute their theories. In other words, economics is based on the scientific method.

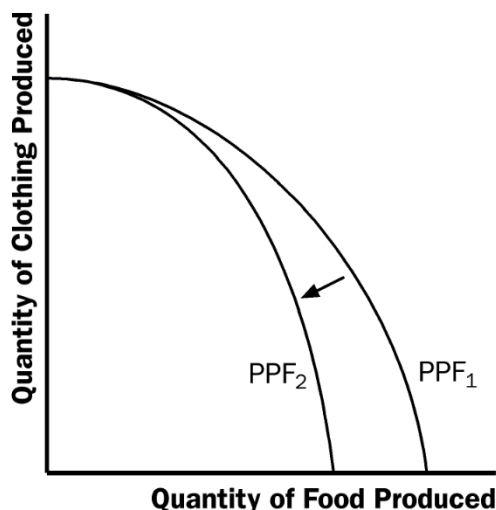
Figure 1 shows the production possibilities frontier for a society that produces food and clothing. Point A is an efficient point (on the frontier), point B is an inefficient point (inside the frontier), and point C is an infeasible point (outside the frontier).



**Figure 1**

The effects of a drought are shown in Figure 2. The drought reduces the amount of food that can be produced, shifting the production possibilities frontier inward. (If a drought also reduced the amount

of cotton available for the production of clothing, the intercept on the vertical axis would also decrease.)



**Figure 2**

Microeconomics is the study of how households and firms make decisions and how they interact in markets. Macroeconomics is the study of economy-wide phenomena, including inflation, unemployment, and economic growth.

2. An example of a positive statement is “a higher price of coffee causes me to buy more tea.” It is a positive statement because it is a claim that describes the world as it is. An example of a normative statement is “the government should restrain coffee prices.” It is a normative statement because it is a claim that prescribes how the world should be. Many other examples are possible.

Parts of the government that regularly rely on advice from economists are the Department of the Treasury in designing tax policy, the Department of Labor in analyzing data on the employment situation, the Department of Justice in enforcing the nation’s antitrust laws, the Congressional Budget Office in evaluating policy proposals, and the Federal Reserve in analyzing economic developments. Many other answers are possible.

3. Economic advisers to the president might disagree about a question of policy because of differences in scientific judgments or differences in values.

### Chapter Quick Quiz

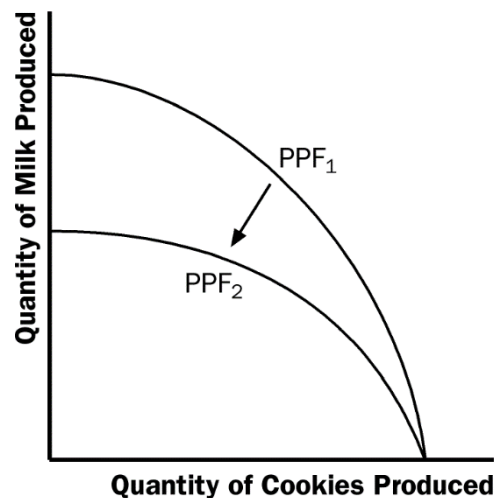
1. c
2. a
3. b
4. c
5. d
6. a

### Questions for Review

1. Economics is a science because economists use the scientific method. They devise theories, collect data, and then analyze these data in an attempt to verify or refute their theories about how the world

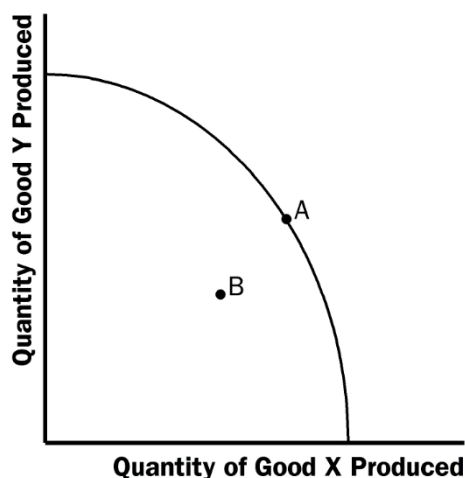
works. Economists use theory and observation like other scientists, but they are limited in their ability to run controlled experiments. Instead, they must rely on natural experiments.

2. Economists make assumptions to simplify problems without substantially affecting the answer. Assumptions can make the world easier to understand.
3. An economic model cannot describe reality exactly because it would be too complicated to understand. A model is a simplification that allows the economist to see what is truly important.
4. There are many possible answers.
5. There are many possible answers, including interactions involving government or international trade.
6. Figure 3 shows a production possibilities frontier between milk and cookies ( $PPF_1$ ). If a disease kills half of the economy's cow population, less milk production is possible, so the  $PPF$  shifts inward ( $PPF_2$ ). Note that if the economy produces all cookies, it does not need any cows and production is unaffected. But if the economy produces any milk at all, then there will be less production possible after the disease hits.



**Figure 3**

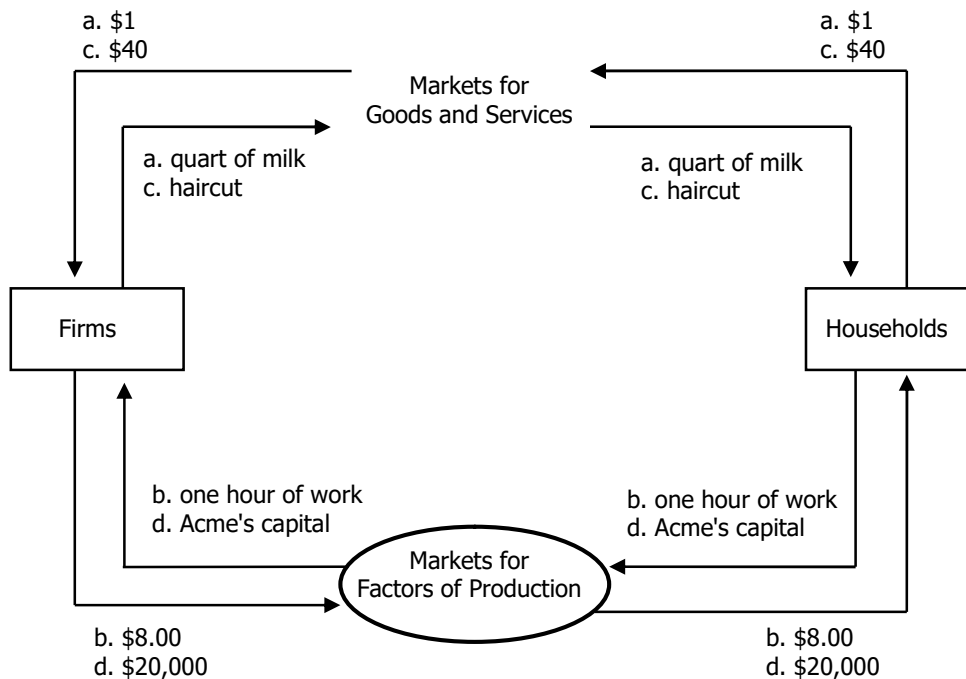
7. An outcome is efficient if the economy is getting all it can from the scarce resources it has available. In terms of the production possibilities frontier, an efficient point is a point on the frontier, such as point A in Figure 4. When the economy is using its resources efficiently, it cannot increase the production of one good without reducing the production of the other. A point inside the frontier, such as point B, is inefficient since more of one good could be produced without reducing the production of another good.

**Figure 4**

8. The two subfields in economics are microeconomics and macroeconomics. Microeconomics is the study of how households and firms make decisions and how they interact in specific markets. Macroeconomics is the study of economy-wide phenomena, including inflation, unemployment, and economic growth.
9. Positive statements are descriptive and make a claim about how the world is, while normative statements are prescriptive and make a claim about how the world ought to be. Here is an example. Positive: A rapid growth rate of money is the cause of inflation. Normative: The government should keep the growth rate of money low.
10. Economists sometimes offer conflicting advice to policymakers for two reasons: (1) economists may disagree about the validity of alternative positive theories about how the world works; and (2) economists may have different values and, therefore, different normative views about what public policy should try to accomplish.

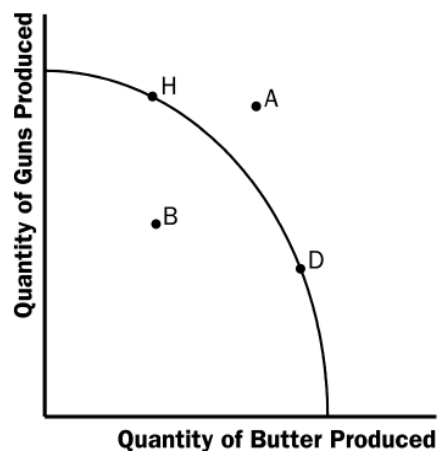
### Problems and Applications

1. See Figure 5; the four transactions are shown.



**Figure 5**

2. a. Figure 6 shows a production possibilities frontier between guns and butter. It is bowed out because of the law of increasing opportunity costs. As the economy moves from producing many guns and a little butter (point H) to producing fewer guns and more butter (point D), the opportunity cost of each additional unit of butter increases because the resources best suited to producing guns are shifting toward the production of butter. Thus, the number of guns given up to produce one more unit of butter is increasing.



**Figure 6**



- b. Point A is impossible for the economy to achieve; it is outside the production possibilities frontier. Point B is feasible but inefficient because it is inside the production possibilities frontier.
  - c. The Hawks might choose a point like H, with many guns and not much butter. The Doves might choose a point like D, with a lot of butter and few guns.
  - d. If both Hawks and Doves reduced their desired quantity of guns by the same amount, the Hawks would get a bigger peace dividend because the production possibilities frontier is much flatter at point H than at point D. As a result, the reduction of a given number of guns, starting at point H, leads to a much larger increase in the quantity of butter produced than when starting at point D.
3. See Figure 7. The shape and position of the frontier depend on how costly it is to maintain a clean environment—the productivity of the environmental industry. Gains in environmental productivity, such as the development of new way to produce electricity that emits fewer pollutants, lead to shifts of the production-possibilities frontier, like the shift from  $PPF_1$  to  $PPF_2$  shown in the figure.

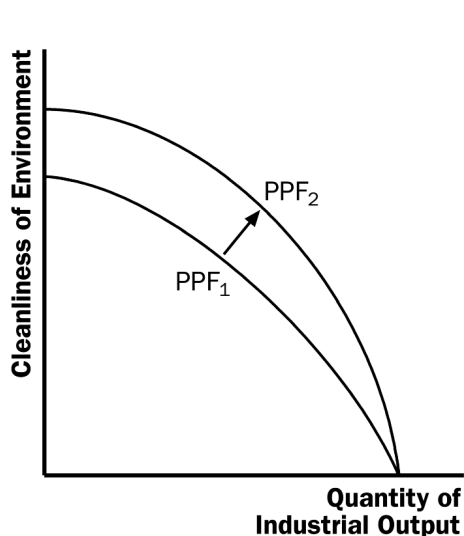


Figure 7

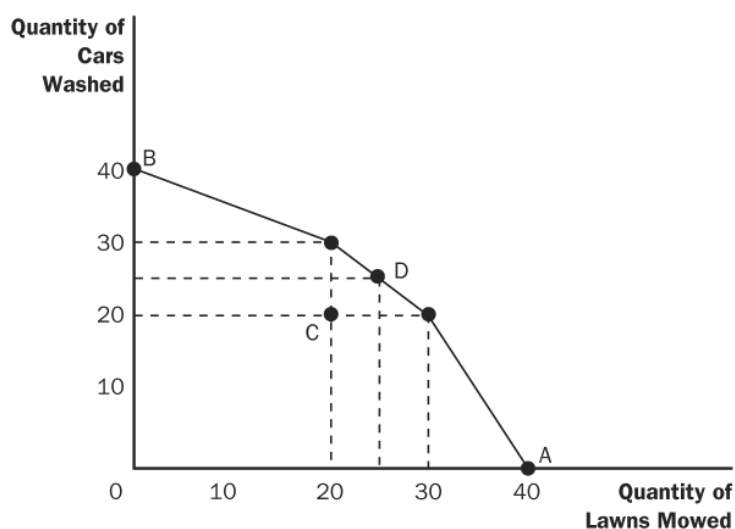


Figure 8

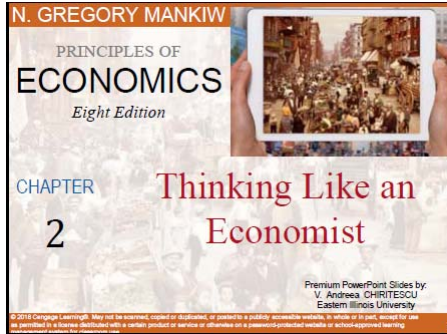
4. a. A: 40 lawns mowed; 0 washed cars  
B: 0 lawns mowed, 40 washed cars  
C: 20 lawns mowed; 20 washed cars  
D: 25 lawns mowed; 25 washed cars
  - b. The production possibilities frontier is shown in Figure 8. Points A, B, and D are on the frontier, while point C is inside the frontier.
  - c. Larry is equally productive at both tasks. Moe is more productive at washing cars, while Curly is more productive at mowing lawns.
  - d. Allocation C is inefficient. More washed cars and mowed lawns can be produced by simply reallocating the time of the three individuals.
5. a. A family's decision about how much income to save is related to microeconomics.
  - b. The effect of government regulations on auto emissions is related to microeconomics.

- c. The impact of higher saving on economic growth is related to macroeconomics.
  - d. A firm's decision about how many workers to hire is related to microeconomics.
  - e. The relationship between the inflation rate and changes in the quantity of money is related to macroeconomics.
- 6.
- a. The statement that society faces a short-run trade-off between inflation and unemployment is a positive statement. It deals with how the economy *is*, not how it should be. Since economists have examined data and found that there is a short-run negative relationship between inflation and unemployment, the statement is a fact.
  - b. The statement that a reduction in the rate of money growth will reduce the rate of inflation is a positive statement. Economists have found that money growth and inflation are very closely related. The statement thus tells how the world is, and so it is a positive statement.
  - c. The statement that the Federal Reserve should reduce the rate of money growth is a normative statement. It states an opinion about something that should be done, not how the world is.
  - d. The statement that society ought to require welfare recipients to look for jobs is a normative statement. It does not state a fact about how the world is. Instead, it is a statement of how the world should be and is thus a normative statement.
  - e. The statement that lower tax rates encourage more work and more saving is a positive statement. Economists have studied the relationship between tax rates and work, as well as the relationship between tax rates and saving. They have found a negative relationship in both cases. So the statement reflects how the world is and is thus a positive statement.

# PowerPoint Lecture Notes for Chapter 02

## Thinking Like an Economist

### Principles of Economics 8th edition, by N. Gregory Mankiw



Besides introducing students to the economic way of thinking, this chapter introduces the Production Possibilities Frontier, the first of many graphs covered in the textbook. The PPF will be used extensively in Chapter 3 (Interdependence and the Gains from Trade).

It would be helpful to ask your students to bring calculators to class on the day you cover this chapter (as well as Chapter 3).

**Look for the answers to these questions:**

- What are economists' two roles? How do they differ?
- What are models? How do economists use them?
- What are the elements of the Circular-Flow Diagram? What concepts does the diagram illustrate?
- How is the Production Possibilities Frontier related to opportunity cost? What other concepts does it illustrate?
- What is the difference between microeconomics and macroeconomics? Between positive and normative?

© 2018 Cengage Learning. May not be scanned, copied or duplicated, or posted to a publicly accessible website, in whole or in part, except for use as permitted in a license distributed with a certain product or service or otherwise on a password-protected website or school-approved learning management system for classroom use.

**The Economist as a Scientist**

- Economists play two roles:
  1. Scientists: try to explain the world
  2. Policy advisors: try to improve it
- As scientists, economists employ the scientific method
  - Dispassionate development and testing of theories about how the world works

© 2018 Cengage Learning. May not be scanned, copied or duplicated, or posted to a publicly accessible website, in whole or in part, except for use as permitted in a license distributed with a certain product or service or otherwise on a password-protected website or school-approved learning management system for classroom use.

**The Economist as a Scientist**

- Assumptions
  - Simplify the complex world and make it easier to understand
  - Example: to study international trade, assume two countries and two goods
- Economists use models to study economic issues
  - Highly simplified representation of a more complicated reality


© 2018 Cengage Learning. May not be scanned, copied or duplicated, or posted to a publicly accessible website, in whole or in part, except for use as permitted in a license distributed with a certain product or service or otherwise on a password-protected website or school-approved learning management system for classroom use.

#### Economic models

- Diagrams and equations
- Omit many details
- Allow us to see what's truly important
- Built with assumptions
- Simplify reality to improve our understanding of it

## The Economist as a Scientist

- Examples of models:
  - The model teeth at the dentist's office
  - A model of human anatomy from high school biology class
  - A road map



© 2018 Cengage Learning®. May not be scanned, copied or duplicated, or posted to a publicly accessible website, in whole or in part, except for use as permitted in a license distributed with a certain product or service or otherwise on a password-protected website or school-approved learning management system for classroom use.

## The Economist as a Scientist

- Circular-flow diagram
  - Visual model of the economy
  - Shows how dollars flow through markets among households and firms
- Two decision makers
  - Firms and Households
- Interacting in two markets
  - Market for goods and services
  - Market for factors of production (inputs)

© 2018 Cengage Learning®. May not be scanned, copied or duplicated, or posted to a publicly accessible website, in whole or in part, except for use as permitted in a license distributed with a certain product or service or otherwise on a password-protected website or school-approved learning management system for classroom use.

### Figure 1 The circular flow

**Households:**

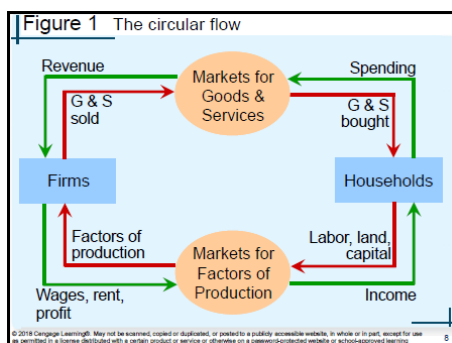
- Own the factors of production, sell/rent them to firms for income
- Buy and consume goods & services

**Firms:**

- Buy/hire factors of production, use them to produce goods and services
- Sell goods & services

© 2018 Cengage Learning®. May not be scanned, copied or duplicated, or posted to a publicly accessible website, in whole or in part, except for use as permitted in a license distributed with a certain product or service or otherwise on a password-protected website or school-approved learning management system for classroom use.

This and the following slide build the Circular-Flow Diagram piece by piece.



In this diagram, the green arrows represent flows of income/payments. The red arrows represent flows of goods and services (including services of the factors of production in the lower half of the diagram).

To keep the graph simple, we have omitted the government, financial system, and foreign sector, as discussed on the next slide.

You may wish to change the order in which the elements appear. To do so, look for “Custom Animation” in your version of PowerPoint.

## The PPF

- Production possibilities frontier
  - A graph: combinations of output that the economy can possibly produce
  - Given the available
    - Factors of production and technology
  - Example:
    - Two goods: computers and wheat
    - One resource: labor (measured in hours)
    - Economy has 50,000 labor hours per month available for production

© 2018 Cengage Learning®. May not be scanned, copied or duplicated, or posted to a publicly accessible website, in whole or in part, except for use as permitted in a license distributed with a certain product or service or otherwise on a password-protected website or school-approved learning management system for classroom use.

### PPF Example

Producing one computer requires 100 hours labor.  
Producing one ton of wheat requires 10 hours labor.

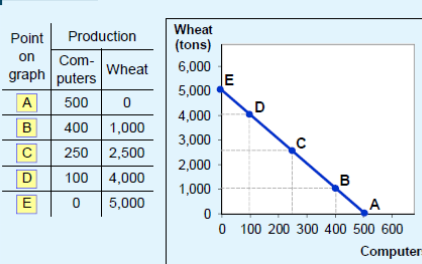
|   | Employment of labor hours |        | Production |       |
|---|---------------------------|--------|------------|-------|
|   | Computers                 | Wheat  | Computers  | Wheat |
| A | 50,000                    | 0      | 500        | 0     |
| B | 40,000                    | 10,000 | 400        | 1,000 |
| C | 25,000                    | 25,000 | 250        | 2,500 |
| D | 10,000                    | 40,000 | 100        | 4,000 |
| E | 0                         | 50,000 | 0          | 5,000 |

© 2018 Cengage Learning®. May not be scanned, copied or duplicated, or posted to a publicly accessible website, in whole or in part, except for use as permitted in a license distributed with a certain product or service or otherwise on a password-protected website or school-approved learning management system for classroom use.

Suggestion:

Show first row. Explain how we get the production numbers from the employment numbers. Then, show the rest of the employment numbers, and give students 3 minutes to compute the production numbers for each employment allocation.

### PPF Example



© 2018 Cengage Learning®. May not be scanned, copied or duplicated, or posted to a publicly accessible website, in whole or in part, except for use as permitted in a license distributed with a certain product or service or otherwise on a password-protected website or school-approved learning management system for classroom use.

Efficient levels of production:

- The economy is getting all it can from the scarce resources available
- Points on the production possibilities frontier (A, B, C, D, E)

Inefficient levels of production: Points inside production possibilities frontier (1,000 tons of wheat and 100 computers)

### Active Learning 1

#### Points off the PPF

On the graph above, find the point that represents (100 computers, 3000 tons of wheat), label it **F**.

- Would it be possible for the economy to produce this combination of the two goods? Why or why not?

Next, find the point that represents (300 computers, 3500 tons of wheat), label it **G**.

- Would it be possible for the economy to produce this combination of the two goods?

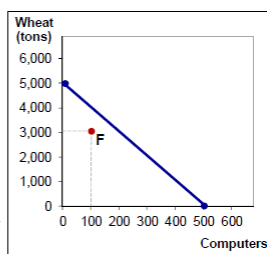
© 2018 Cengage Learning®. May not be scanned, copied or duplicated, or posted to a publicly accessible website, in whole or in part, except for use as permitted in a license distributed with a certain product or service or otherwise on a password-protected website or school-approved learning management system for classroom use.

This exercise leads students to discover for themselves that points under the PPF are possible but inefficient, while points above it are not possible.

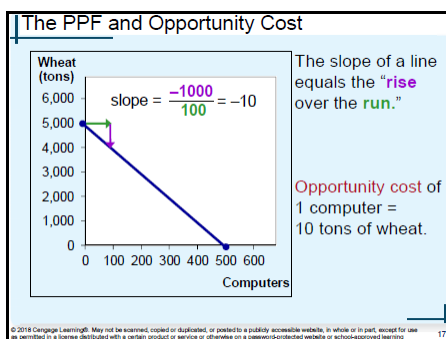
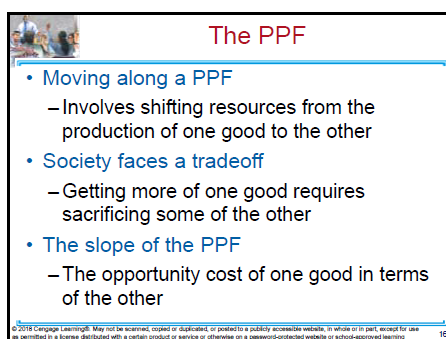
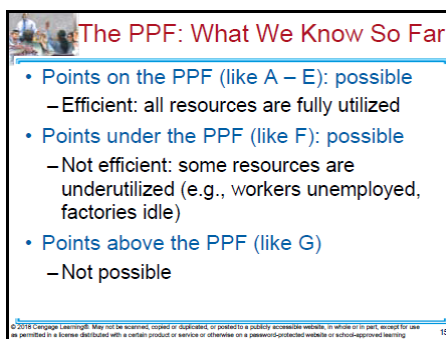
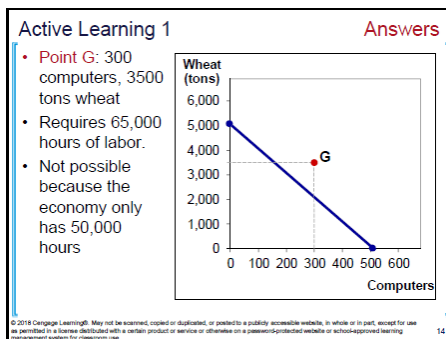
### Active Learning 1

#### Answers

- Point **F**: 100 computers, 3000 tons wheat
- Requires 40,000 hours of labor
- Possible but not efficient: could get more of either good without sacrificing any of the other

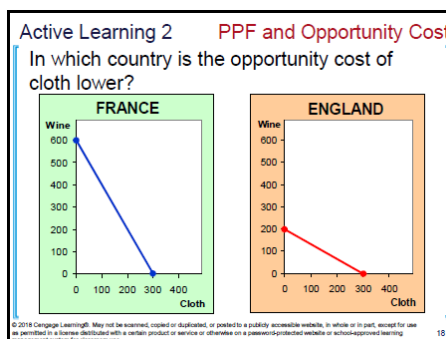


© 2018 Cengage Learning®. May not be scanned, copied or duplicated, or posted to a publicly accessible website, in whole or in part, except for use as permitted in a license distributed with a certain product or service or otherwise on a password-protected website or school-approved learning management system for classroom use.

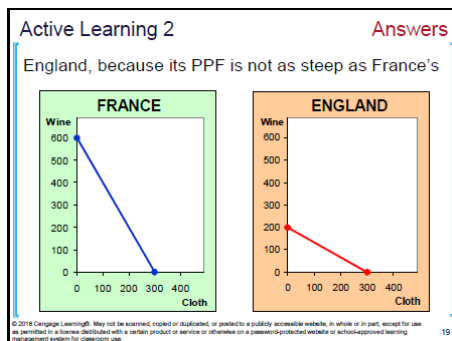


Here, the “rise” is a negative number, because as you move to the right, the line falls (meaning wheat output is reduced).

Moving to the right involves shifting resources from the production of wheat (which causes wheat output to fall) to the production of computers (which causes computer production to rise). Producing an additional computer requires the resources that would otherwise produce 10 tons of wheat.



This exercise reinforces the material on the preceding slide. It is especially useful if you plan to cover Chapter 3 (Interdependence and the Gains from Trade) after completing Chapter 2.

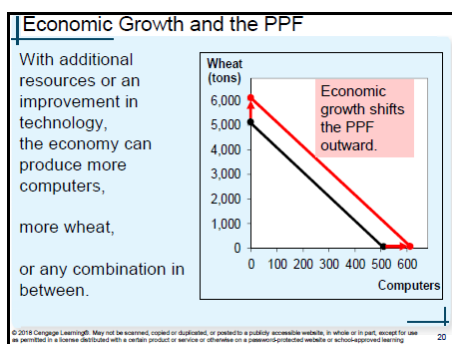


There are two ways to get the answer.

The hard way is to compute the slope of both PPFs. The slope of France's PPF equals  $-600/300 = -2$ , meaning that France must give up two units of wine to get an additional unit of cloth. The slope of England's PPF =  $-200/300 = -2/3$ , meaning that England only must sacrifice  $2/3$  of a unit of wine to get an additional unit of cloth. Thus, the opportunity cost of cloth is lower in England than France.

The question, however, does not ask for the numerical values of the opportunity cost of cloth in the two countries. It only asks which country has a lower opportunity cost of cloth.

There is an easy way to determine the answer. Students must remember that the slope of the PPF equals the opportunity cost of the good measured on the horizontal axis. Then, students can simply "eyeball" the two PPFs to determine which is steepest. From what the graphs show, it's pretty easy to see that England's PPF isn't as steep, and therefore the opportunity cost of cloth is lower in England than in France.



The PPF shows the tradeoff between the outputs of different goods at a given time, but the tradeoff can change over time.

For example, over time, the economy might get more workers (or more factories or more land). Or, a more efficient technology might be invented. Both events—an increase in the economy's resources or an improvement in technology—cause an expansion in the set of opportunities. That is, both allow the economy to produce more of one or both goods.

This is a simple example of economic growth, an important subject that gets its own chapter in the macroeconomics portion of the textbook.

In the example shown on this slide, economic growth causes a parallel outward shift of the PPF. Since the new PPF is parallel to the old one, the tradeoff between the two goods is the same. However, this need not always be the case. For example, if a new technology had more impact on the computer industry than on the wheat industry, then the horizontal (computer) intercept would increase more than the vertical (wheat) intercept, and the PPF would become flatter: the opportunity cost of computers would fall, because the technology has made them relatively cheaper (relative to wheat). Going into more detail here is probably beyond the scope of this chapter.

## The Shape of the PPF

- **Shape of the PPF**
  - Straight line: constant opportunity cost
    - Previous example: the opportunity cost of 1 computer is 10 tons of wheat
  - Bowed outward: increasing opportunity cost
    - As more units of a good are produced, we need to give up increasing amounts of the other good produced

### Why the PPF Might Be Bowed Outward

As the economy shifts resources from beer to mountain bikes:  
PPF becomes steeper  
and the opportunity cost of mountain bikes increases.

### Why the PPF Might Be Bowed Outward

At A, opportunity cost of mountain bikes is low.  
At point A, most workers are producing beer, even those who are better suited to building bikes.  
So, do not have to give up much beer to get more bikes.

### Why the PPF Might Be Bowed Outward

At B, opportunity cost of mountain bikes is high.  
At B, most workers are producing bikes. The few left in beer production are the best brewers.  
Producing more bikes would require shifting some of the best brewers away from beer production causing a big drop in beer output.

### Why the PPF Might Be Bowed Outward

- **The PPF is bowed outward when:**
  - Different workers have different skills
  - Different opportunity costs of producing one good in terms of the other
  - There is some other resource, or mix of resources with varying opportunity costs
    - E.g., different types of land suited for different uses

Here, we are using “workers” for the more general “resources,” to keep things simple and consistent with the previous examples.

The bowed outward PPF is more realistic. However, the linear PPF is simpler to work with, and we can learn a lot about how the economy works using the linear PPF. In Chapter 3, we will use a linear PPF to show how trade can make two countries (or two individuals) better off.



## The Economist as a Scientist

- **Microeconomics**
  - The study of how households and firms make decisions and how they interact in markets
- **Macroeconomics**
  - The study of economy-wide phenomena, including inflation, unemployment, and economic growth

© 2018 Cengage Learning. May not be scanned, copied or duplicated, or posted to a publicly accessible website, in whole or in part, except for use as permitted in a license distributed with a certain product or service or otherwise on a password-protected website or school-approved learning management system for classroom use.

These two branches of economics are closely intertwined, yet distinct—they address different questions.

## The Economist as Policy Adviser

- **Positive statements: descriptive**
  - Attempt to describe the world as it is
  - Confirm or refute by examining evidence: "Minimum-wage laws cause unemployment"
- **Normative statements: prescriptive**
  - Attempt to prescribe how the world should be: "The government should raise the minimum wage"

© 2018 Cengage Learning. May not be scanned, copied or duplicated, or posted to a publicly accessible website, in whole or in part, except for use as permitted in a license distributed with a certain product or service or otherwise on a password-protected website or school-approved learning management system for classroom use.

### Active Learning 3 Positive vs. Normative

Which of these statements are "positive" and which are "normative"? How can you tell the difference?

- Prices rise when the government increases the quantity of money.
- The government should print less money.
- A tax cut is needed to stimulate the economy.
- An increase in the price of burritos will cause an increase in consumer demand for music downloads.

© 2018 Cengage Learning. May not be scanned, copied or duplicated, or posted to a publicly accessible website, in whole or in part, except for use as permitted in a license distributed with a certain product or service or otherwise on a password-protected website or school-approved learning management system for classroom use.

### Active Learning 3 Answers

- Prices rise when the government increases the quantity of money.  
*Positive – describes a relationship, could use data to confirm or refute.*
- The government should print less money.  
*Normative – this is a value judgment, cannot be confirmed or refuted.*

© 2018 Cengage Learning. May not be scanned, copied or duplicated, or posted to a publicly accessible website, in whole or in part, except for use as permitted in a license distributed with a certain product or service or otherwise on a password-protected website or school-approved learning management system for classroom use.

### Active Learning 3 Answers

- A tax cut is needed to stimulate the economy.  
*Normative – another value judgment.*
- An increase in the price of burritos will cause an increase in consumer demand for music downloads  
*Positive – describes a relationship.*

*Note that a statement need not be true to be positive.*

© 2018 Cengage Learning. May not be scanned, copied or duplicated, or posted to a publicly accessible website, in whole or in part, except for use as permitted in a license distributed with a certain product or service or otherwise on a password-protected website or school-approved learning management system for classroom use.

### Why Economists Disagree

- Economists often give conflicting policy advice
  - Can disagree about the validity of alternative positive theories about the world
  - May have different values and, therefore, different normative views about what policy should try to accomplish
- Yet, there are many propositions about which most economists agree

© 2018 Cengage Learning®. May not be scanned, copied or duplicated, or posted to a publicly accessible website, in whole or in part, except for use as permitted in a license distributed with a certain product or service or otherwise on a password-protected website or school-approved learning management system for classroom use.

### ASK THE EXPERTS

#### Ticket Resale

*"Laws that limit the resale of tickets for entertainment and sports events make potential audience members for those events worse off on average."*

What do economists say?

| Response  | Percentage |
|-----------|------------|
| Agree     | 80%        |
| Uncertain | 12%        |
| Disagree  | 8%         |

© 2018 Cengage Learning®. May not be scanned, copied or duplicated, or posted to a publicly accessible website, in whole or in part, except for use as permitted in a license distributed with a certain product or service or otherwise on a password-protected website or school-approved learning management system for classroom use.

Source: IGM Economic Experts Panel, April 16, 2012.

The 'Ask the experts' feature provides the opportunity for class discussion.

After showing the statement, you can ask your students to choose one of the options: agree, disagree, or uncertain. You can collect their answers in a variety of ways: show of hands, ballot, clicker system, etc. If time permits, you can allow students to group and discuss some of the reasons they chose their answer.

Ask the students to share with the class their reasons. Their answers will vary.

You can revisit this Ticket Resale feature (scalping tickets) in chapter 6, after discussing price controls, when the students will have more tools to analyze it (allowing for tickets resale, or making scalping legal removes the binding price ceiling).

### Propositions about Which Most Economists Agree (and percentage of economists who agree)

- A ceiling on rents reduces the quantity and quality of housing available. (93%)
- Tariffs and import quotas usually reduce general economic welfare. (93%)
- The United States should not restrict employers from outsourcing work to foreign countries. (90%)
- The United States should eliminate agricultural subsidies. (85%)
- Local and state governments should eliminate subsidies to professional sports franchises. (85%)

© 2018 Cengage Learning®. May not be scanned, copied or duplicated, or posted to a publicly accessible website, in whole or in part, except for use as permitted in a license distributed with a certain product or service or otherwise on a password-protected website or school-approved learning management system for classroom use.

This slide and the next show several of the Propositions appearing in Table 1 of the chapter. For the full list, see Table 1 in the chapter.

Note: Some of the terms appearing in these statements have not yet been defined, so you may wish to define them to students as they appear on the screen.

If you're pressed for time, delete the following slide and refer your students to Table 1 in the chapter.

### Propositions about Which Most Economists Agree (and percentage of economists who agree)

- Cash payments increase the welfare of recipients to a greater degree than do transfers-in kind of equal cash value. (84%)
- A large federal budget deficit has an adverse effect on the economy. (83%)
- The United States should not ban genetically modified crops. (82%)
- A minimum wage increases unemployment among young and unskilled workers. (79%)
- Government subsidies on ethanol in the United States should be reduced or eliminated. (78%)

© 2018 Cengage Learning®. May not be scanned, copied or duplicated, or posted to a publicly accessible website, in whole or in part, except for use as permitted in a license distributed with a certain product or service or otherwise on a password-protected website or school-approved learning management system for classroom use.

### Summary

- Economists are scientists
  - Make appropriate assumptions and build simplified models
  - The circular-flow diagram and the production possibilities frontier
- Microeconomists study decision making by households and firms and their interactions in the marketplace
- Macroeconomists study the forces and trends that affect the economy as a whole

© 2018 Cengage Learning®. May not be scanned, copied or duplicated, or posted to a publicly accessible website, in whole or in part, except for use as permitted in a license distributed with a certain product or service or otherwise on a password-protected website or school-approved learning management system for classroom use.

35

### Summary

- A positive statement is an assertion about how the world is
- A normative statement is an assertion about how the world ought to be
- As policy advisers, economists make normative statements
- Economists sometimes offer conflicting advice
  - Differences in scientific judgments
  - Differences in values

© 2018 Cengage Learning®. May not be scanned, copied or duplicated, or posted to a publicly accessible website, in whole or in part, except for use as permitted in a license distributed with a certain product or service or otherwise on a password-protected website or school-approved learning management system for classroom use.

36